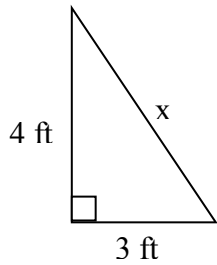


Name: _____ Date: _____ Pythagorean Theorem Practice

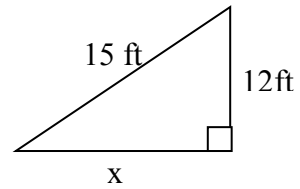
Label the hypotenuse of the triangle c . In each triangle find the length of the side marked x to the nearest unit (foot, cm, etc.). Show your work.

$$a^2 + b^2 = c^2$$

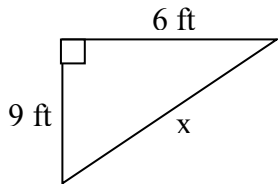
1.



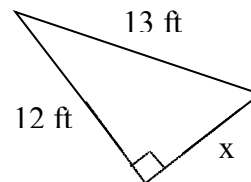
2.



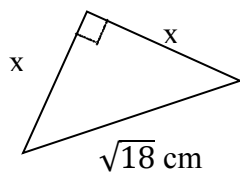
3.



4.



5.



6.

