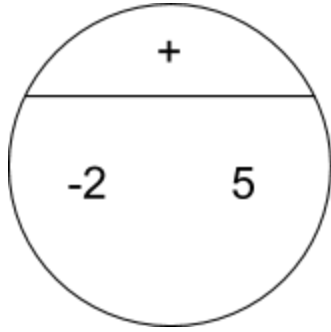


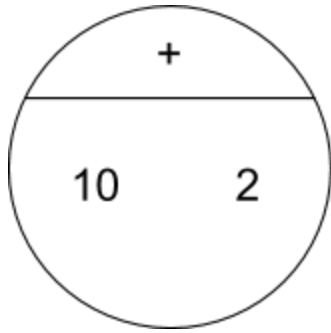
1



A

$$(10 + 2)$$

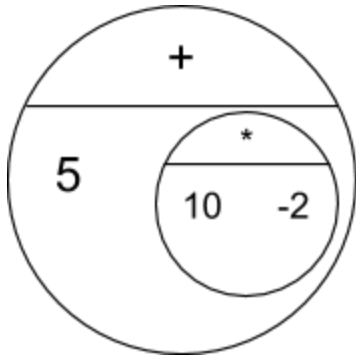
2



B

$$(5 * (-10 / -2))$$

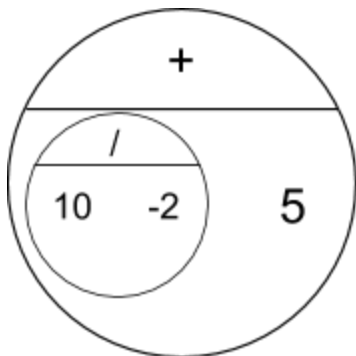
3



C

$$(-2 - (10 * (5 + 2)))$$

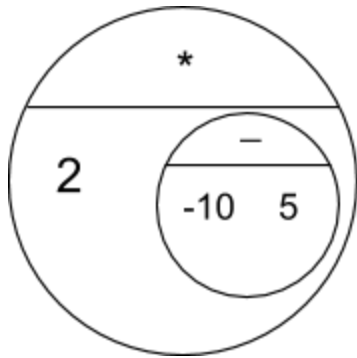
4



D

$$((5 + 2) - (10 * -2))$$

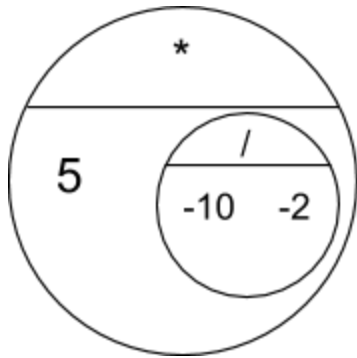
5



E

$$(2 * (-10 - 5))$$

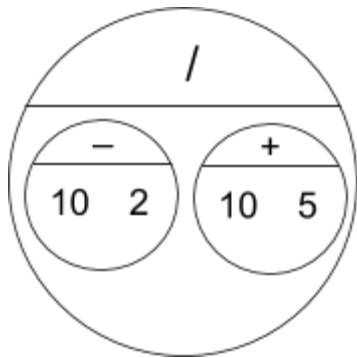
6



F

$$((10 / -2) + 5)$$

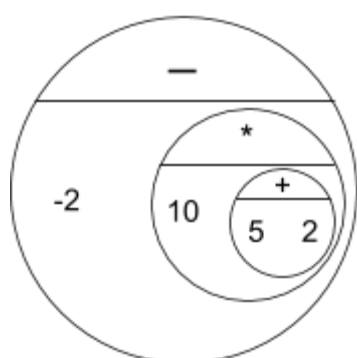
7



G

$$(-2 + 5)$$

8



H

$$((10 - 2) / (10 + 5))$$